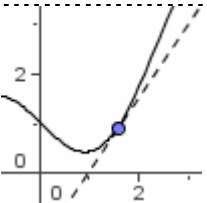
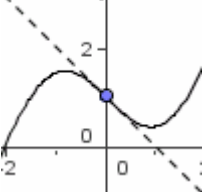
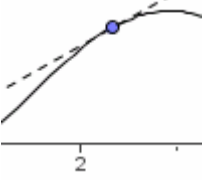
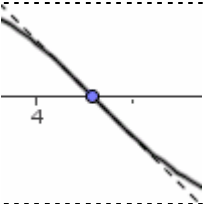
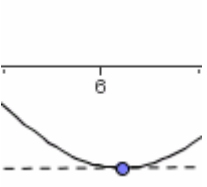


Indica il segno del valore della funzione relativamente al punto evidenziato

	$f(x_0)$	$f'(x_0)$	$f''(x_0)$
	<input type="checkbox"/> positivo <input type="checkbox"/> negativo <input type="checkbox"/> nullo	<input type="checkbox"/> positivo <input type="checkbox"/> negativo <input type="checkbox"/> nullo	<input type="checkbox"/> positivo <input type="checkbox"/> negativo <input type="checkbox"/> nullo
	<input type="checkbox"/> positivo <input type="checkbox"/> negativo <input type="checkbox"/> nullo	<input type="checkbox"/> positivo <input type="checkbox"/> negativo <input type="checkbox"/> nullo	<input type="checkbox"/> positivo <input type="checkbox"/> negativo <input type="checkbox"/> nullo
	<input type="checkbox"/> positivo <input type="checkbox"/> negativo <input type="checkbox"/> nullo	<input type="checkbox"/> positivo <input type="checkbox"/> negativo <input type="checkbox"/> nullo	<input type="checkbox"/> positivo <input type="checkbox"/> negativo <input type="checkbox"/> nullo
	<input type="checkbox"/> positivo <input type="checkbox"/> negativo <input type="checkbox"/> nullo	<input type="checkbox"/> positivo <input type="checkbox"/> negativo <input type="checkbox"/> nullo	<input type="checkbox"/> positivo <input type="checkbox"/> negativo <input type="checkbox"/> nullo
	<input type="checkbox"/> positivo <input type="checkbox"/> negativo <input type="checkbox"/> nullo	<input type="checkbox"/> positivo <input type="checkbox"/> negativo <input type="checkbox"/> nullo	<input type="checkbox"/> positivo <input type="checkbox"/> negativo <input type="checkbox"/> nullo

Studia il grafico delle funzioni

$$y = (x-1)(x-2)(1-x)$$

$$y = \frac{1}{4}x^4 + \frac{1}{3}x^3 + 1$$

$$y = \frac{5x+5}{x^2+8}$$

$$y = x^5(1-x)^3$$

$$y = \frac{x^2+1}{x+2}$$